

18/19

O. P. JINDAL SCHOOL, SAVITRI NAGAR
Half Yearly Examination (2018 – 2019)

Class: III

MM: 80

Subject: Social Science

Time: 2:00 Hrs.

Name: _____ Class / Section: _____ Roll No.: _____

(Fifteen Minutes Extra will be for reading the Question Paper.)

GENERAL INSTRUCTIONS:

All questions are compulsory.

Question no. 1,2,3,4, are objective questions.

Question number 5 is short answer questions, carrying three marks each.

Question numbers 6 is long answer questions, carrying five marks each.

Question number 7 is drawing of diagram, carrying two marks each.

Question no. 8 is picture identification, carrying two marks each.

Q1 Fill in the blanks:

(1X5=5)

- There are _____ continents in the world.
- Birds make new nests during _____ season.
- Early humans lived in _____.
- The remains of big granary have been found in _____.
- The _____ near your house is your neighbourhood.

Q2. Match the following:-

(1X5=5)

- | | |
|---------------------------|-----------------------------|
| a) Neighbourhood services | () Great bath |
| b) Mohenjo-daro | () Rubbing two stone |
| c) Fire | () Banks, Hospitals, etc |
| d) Hominins | () This season brings rain |
| e) Monsoon | () Early humans |

Q3. Choose the correct option:-

(1X5=5)

- Large stretches of almost flat land are called
 a) Plateau b) Hills c) Plains d) Mountains
- The sun sets in the _____.
 a) South b) East c) North d) west
- Sources of history help us to understand _____ better.
 a) The past b) The present c) The future d) None of these
- Early humans made pots out of _____.
 a) Clay b) Metal c) Wood d) None of these

(v) A rough map drawn without measurement is called _____.

- a) Sketch b) Atlas c) landmark d) None of these

Q4. Write in one word:-

(1X6)

- (a) Drawing of the whole or a part of the earth's surface on a flat surface. _____
- (b) A desert which is very cold and has long winters. _____
- (c) A scale where the dates of different events are placed in the order in which they happened. _____
- (d) The top of the mountain. _____
- (e) A piece of land completely surrounded by water. _____
- (f) It is the direction at the top of a map. _____

Q5. Answer the following questions:-

- (a) What is a neighbourhood? How can we keep our neighbourhood neat and clean? (1+2)
- (b) What is the most remarkable thing about the Harappan cities? (3)
- (c) How was fire useful to early humans? (any three) (3)
- (d) Who were Hominins? Why are early humans called hunter-gatherer? (1+2)
- (e) Name any three sources of history. (3)
- (f) How do seasons affect our lives? (3)
- (g) How can we find the four directions? (3)
- (h) How are plains formed? (3)
- (i) How many oceans are there? Name any four oceans. (1+2)
- (j) How did the Indus Valley Civilization come to an end? (any three reasons) (3)

Q6. Answer these questions:

- (k) What are neighbourhood services? (any five) (5)
- (l) How did early people store extra food? How did early human discover how to light a fire? (2+3)
- (m) Why is the monsoon or rainy season very important? How do seasons affect our lives? (2+3)

Q7. (a) Draw a diagram of summer season. (2)

(b) Draw a diagram of four directions by observing the rising sun. (2)

Q8. Identify the given pictures and write one sentence about each: (2X5=10)


(a)




(b)




(c)



(d)



(e)



For more step by step drawing tutorials visit us at www.drawingtutorials101.com

18/4